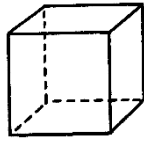


Surface Area of Right Prisms - Practice

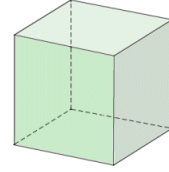
1) Calculate the surface area of each cube below (include units in your answer)

a)



28 cm

b)



15.5 ft

2. Calculate the surface area of each rectangular prism (include units in your answer).

a)



10 cm

25 cm

45 cm

b)



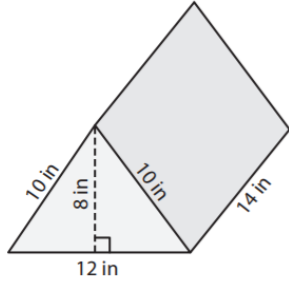
3.5 inches

12 inches

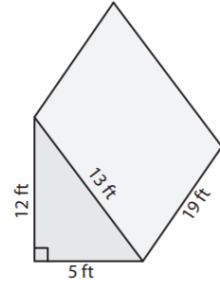
5 inches

3. Calculate the surface area of each triangular prism below (include units in your answer)

a)

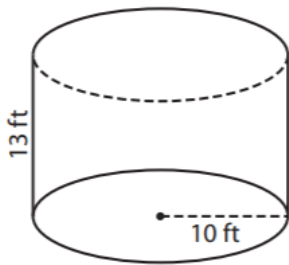


b)



4. Calculate the surface area of each cylinder (include units in your answer).

a)



b)

