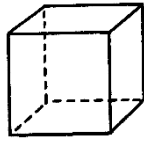


## Volume of Right Prisms

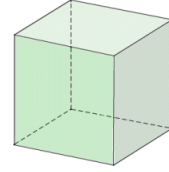
1) Calculate the volume of each cube (include units in your answer)

a)



28 cm

b)



15.5 ft

2. Calculate the volume of each rectangular prism (include units in your answer).

a)



45 cm

10 cm

25 cm

b)



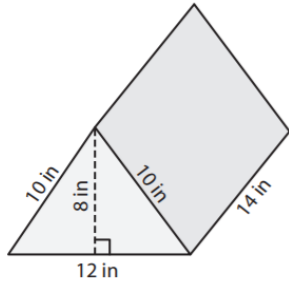
3.5 inches

12 inches

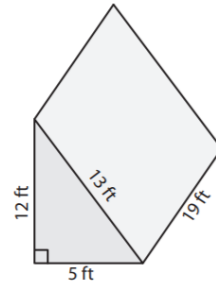
5 inches

3) Calculate the volume of each triangular prism (include units in your answer)

a)

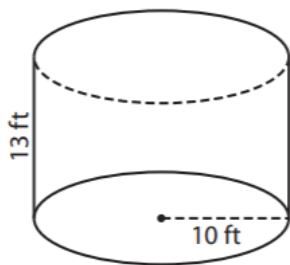


b)

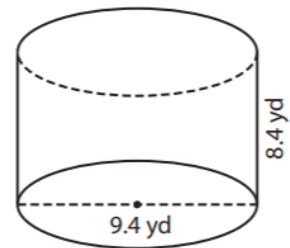


4. Calculate the volume of each cylinder (include units in your answer).

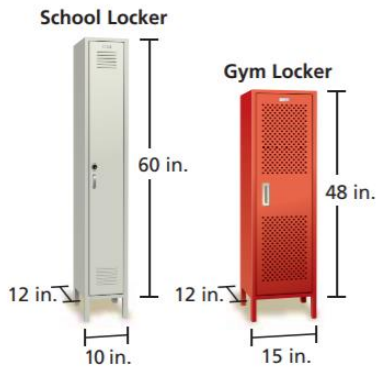
a)



b)



5. Glen believes that the locker on the right has more storage space. Is he correct? Explain



6. Bob thinks the garage on the right has about twice as much space as the one on the left. Is he correct?

